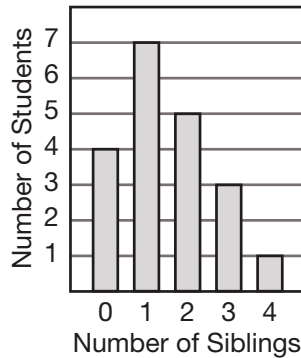


INVESTIGATION ANSWERS

Displaying Data:

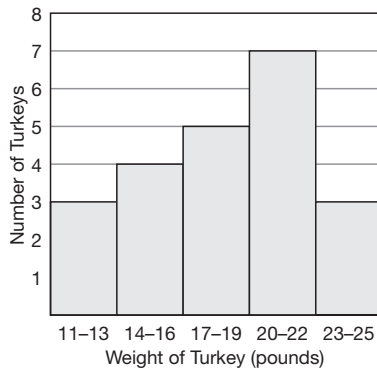
1 Number of Siblings of Students in the Class



2 Frequency Table

Weight	Freq.
11–13 lb	3
14–16 lb	4
17–19 lb	5
20–22 lb	7
23–25 lb	3

Turkeys from ABC Market



3

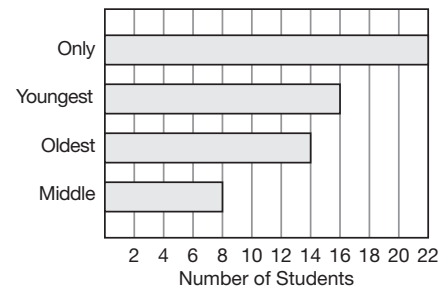
Stem	Leaf
1	2 3 4 8 9 9
2	0 2 2 3 5

4

Stem	Leaf
1	1 2 3 4 4 6 6 7 8 8 9 9
2	0 0 0 1 2 2 2 3 3 5

5

Positions of Students in Families



6 40 children

7 20 children

8 The pictograph should have half as many icons in each category.

9 sleeping and playing; eating

10 reading

11 watching television, playing, sleeping

12 Students should look for diameters in the circle to identify activities that together form about one half of the graph.

13 10 families

This page may not be reproduced without permission of Harcourt Achieve Inc.

INVESTIGATION ANSWERS

14 15 boys

15 13 soccer players

16 7 boys

17 6 soccer players

18 15 girls

19 9 girls

Investigate Further:

a See student work.

b See student work.

c See student work.

d See student work.

e See student work.

f See student work.