

INVESTIGATION ANSWERS

Measuring Angles:

5 

6 

7 

8 

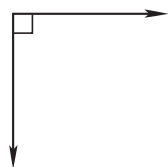
9 165°

10 90°

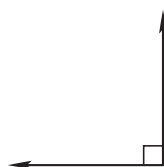
11 50°

Investigate Further:

a 90° counterclockwise

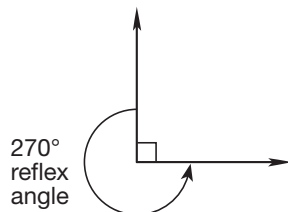


90° clockwise



90° counterclockwise

b **Sample:** I drew an angle less than 180° and used the outside of the angle as the reflex angle.



270°
reflex
angle

